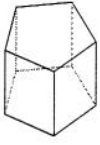


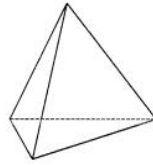
### Identifying Solid Figures

Name each figure.

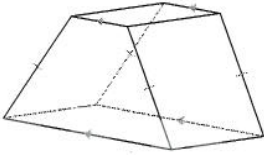
1)



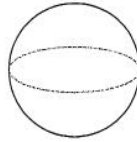
2)



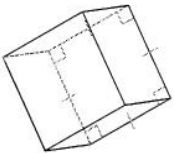
3)



4)



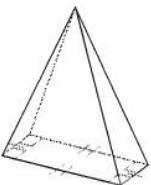
5)



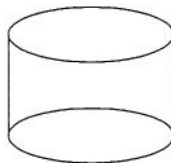
6)



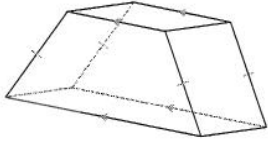
7)



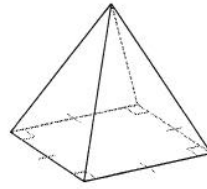
8)



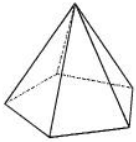
9)



10)



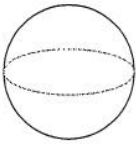
11)



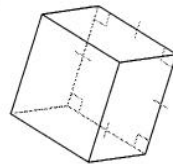
12)



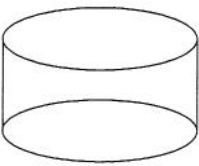
13)



14)



15)



16)

