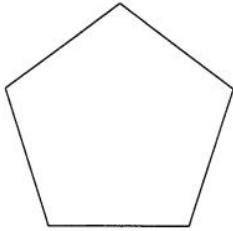


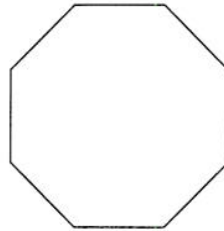
Polygons and Angles

Find the measure of one interior angle in each polygon. Round your answer to the nearest tenth if necessary.

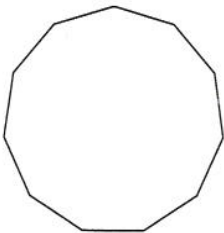
1)



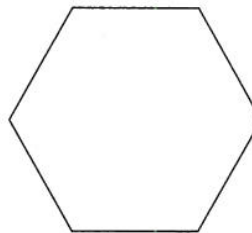
2)



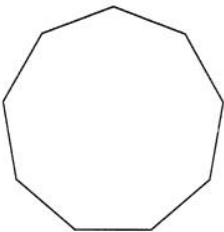
3)



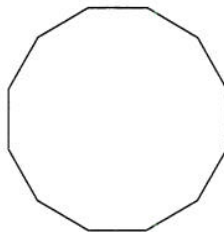
4)



5)



6)



7) regular 24-gon

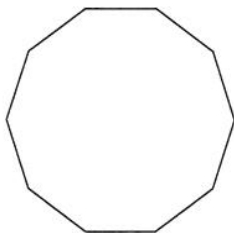
8) regular quadrilateral

9) regular 23-gon

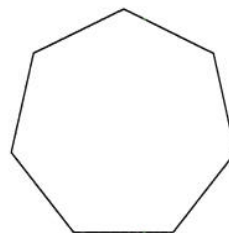
10) regular 16-gon

Find the measure of one exterior angle in each polygon. Round your answer to the nearest tenth if necessary.

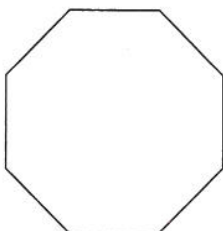
11)



12)



13)



14)

