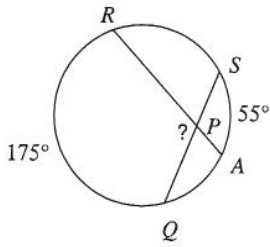


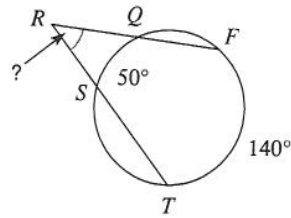
Secant Angles

Find the measure of the arc or angle indicated. Assume that lines which appear tangent are tangent.

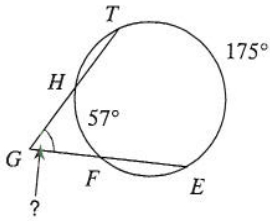
1)



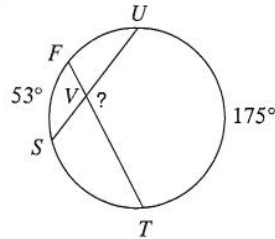
2)



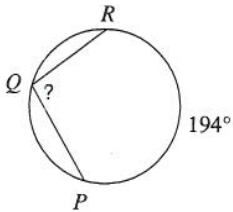
3)



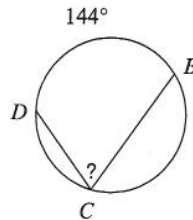
4)



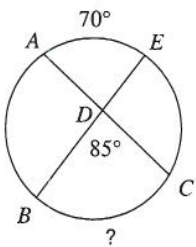
5)



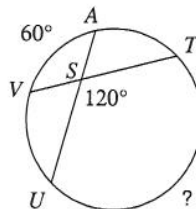
6)



7)

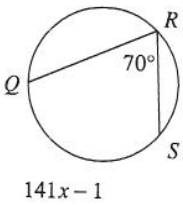


8)



Solve for x . Assume that lines which appear tangent are tangent.

9)



10)

