

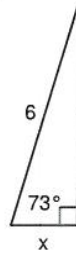
### Solving Right Triangles

Find the missing side. Round to the nearest tenth.

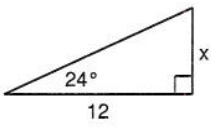
1)



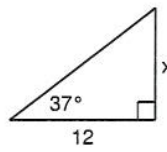
2)



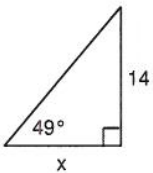
3)



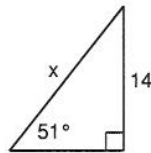
4)



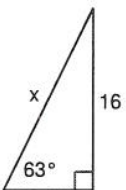
5)



6)



7)



8)

