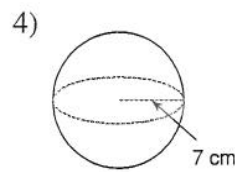
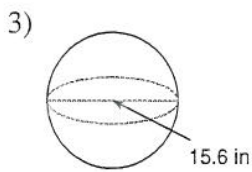
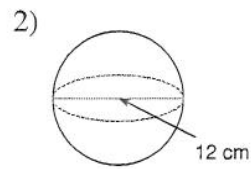
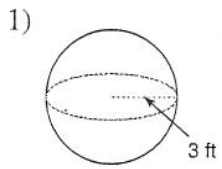


Spheres

Find the surface area of each figure. Round your answers to the nearest tenth, if necessary. *Show ALL work!*



Find the volume of each figure. Round your answers to the nearest tenth, if necessary. *Show ALL work!*

